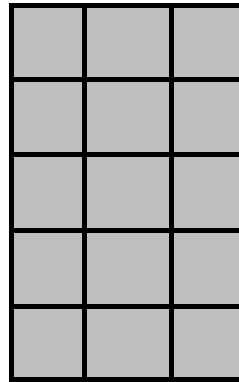


Division using arrays


Organise your number sentence into equal rows. Count up the whole set of squares and count the rows to give your answer.




1 row of 3 equals 3
 $3 \div 3 = 1$



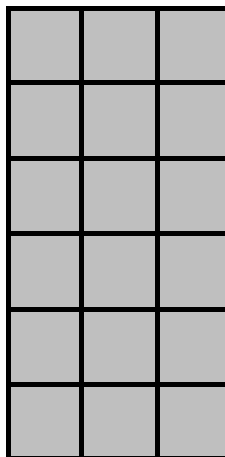
___ \div 3 = ___



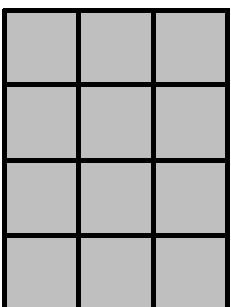
$6 \div 3 =$ ___



___ \div 3 = ___



___ \div ___ = ___



___ \div ___ = ___

Now try these using the arrays method

- 1.) $18 \div 3 =$
- 2.) $21 \div 7 =$
- 3.) $36 \div 6 =$
- 4.) $45 \div 5 =$