

Year 1 Maths Half Term 6 Week 1


Recap Shape

Friday 5th June 2020

Green

Draw these shapes in your book.


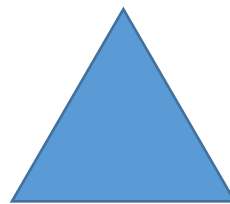
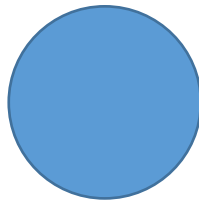
Name the shape underneath and for each one say how many straight sides it has and how many corners.



Name -----

Sides -----

Corners -----



Yellow

Guess the shape.

1.This shape has 3 straight sides.

It has 3 corners.

It is a _____ Draw it.

2.This shape has 0 straight lines

It has 0 corners.

It is a _____ Draw it.

3.This shape has 4 straight sides all the same length.

It has 4 corners. Draw and name it.

4. This shape has 4 straight sides not all the same length.

It has 4 corners. Draw and name it.

Red

Name these shapes and see if you can find anything in your house that is the same shape as these shapes. Draw the things you find.

