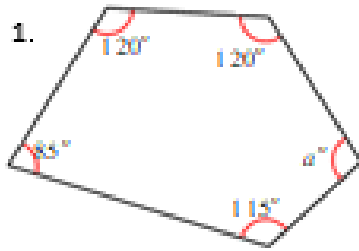


1.



Explain how you know:

---



---

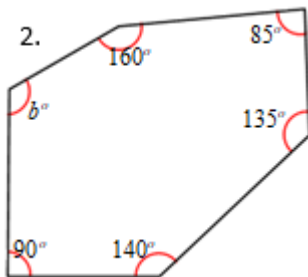


---



---

2.



Explain how you know:

---



---

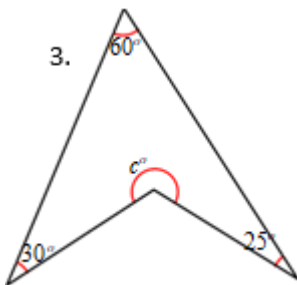


---



---

3.



Explain how you know:

---



---

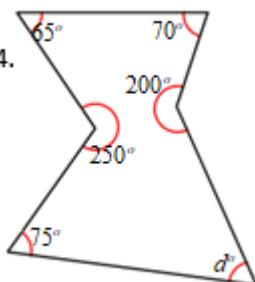


---



---

4.



Explain how you know:

---



---



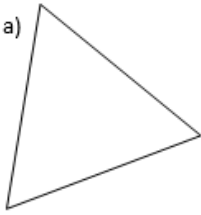
---



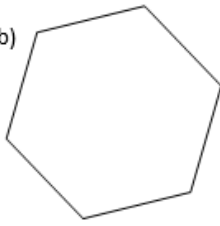
---

These shapes are all regular polygons. Find the size of the interior angle in each.

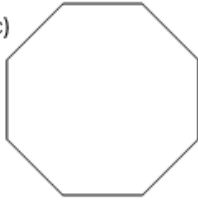
a)



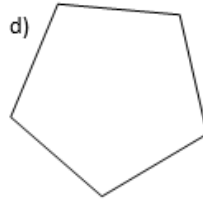
b)



c)



d)



e)

