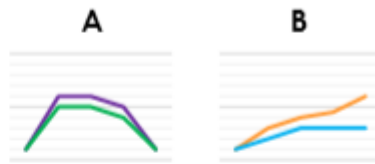


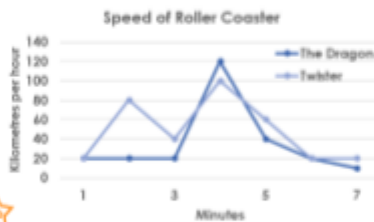
7a. Write your own story to match the data in the two graphs below.




7b. Write your own story to match the data in the two graphs below.



8a. Fazir and May are interpreting a graph.
Fazir says, "The Dragon has a rapid increase in speed at 3 minutes."
May says, "The Twister goes the fastest."
Who is correct? Explain.



8b. Nancy and Quinn are interpreting a graph.
Nancy says, "Both treks started at 9am."
Quinn says, "The 2nd trek was the longest by 2km."
Who is correct? Explain.



9a. Carl's Cards makes it's biggest profit in the holiday season. What date is the shop closed for business? If the shop earns £200 for every 100 cards sold, which year made the biggest profit?



9b. Years 5 and 6 are holding a fundraiser for charity. For every £1 raised, the school is giving an extra £2 to the same charity. How much money did each year group raise in total?

