
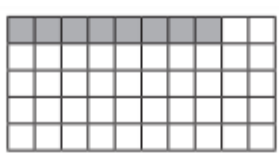









Write the percentage, fraction and decimal represented by the following:

 <div data-bbox="215 436 486 515"> <div>%</div> <div>—</div> <div></div> </div>	 <div data-bbox="566 436 837 515"> <div>%</div> <div>—</div> <div></div> </div>	 <div data-bbox="917 436 1179 515"> <div>%</div> <div>—</div> <div></div> </div>
 <div data-bbox="215 817 486 907"> <div>%</div> <div>—</div> <div></div> </div>	 <div data-bbox="566 817 837 907"> <div>%</div> <div>—</div> <div></div> </div>	 <div data-bbox="917 817 1179 907"> <div>%</div> <div>—</div> <div></div> </div>
 <div data-bbox="215 1467 486 1547"> <div>%</div> <div>—</div> <div></div> </div>	 <div data-bbox="566 1467 837 1547"> <div>%</div> <div>—</div> <div></div> </div>	 <div data-bbox="917 1467 1179 1547"> <div>%</div> <div>—</div> <div></div> </div>